

Key

1-13. From the data table below, calculate requested quantities.

x	y	x ²	y ²	xy
1	3	1	9	3
4	9	16	81	36
3	7	9	49	21
5	10	25	100	50
<u> </u>	<u> </u>	<u> </u>	<u> </u>	<u> </u>
3.25	7.25	12.75	59.75	27.5

ck #2

x+y
4
13
10
15
AVG 10.5

1. Average of list $4x + 1$. $\overline{4x+1} = 4\bar{x} + 1 = 4(3.25) + 1 = 14$

- a) 13 b) 15 **c) 14** d) 16 e) 15

2. Average of list $x + y$ $\overline{x+y} = \bar{x} + \bar{y} = 3.25 + 7.25 = 10.5$

- a) 12 b) 11 c) 9 **d) 10.5** e) 13.5

3. $\hat{\sigma}_y$ (equal to $\sqrt{y^2 - \bar{y}^2}$) is 2.681. What is $\hat{\sigma}_x$? $\hat{\sigma}_x = \sqrt{\frac{\sum(x-\bar{x})^2}{n}} = \sqrt{\bar{x}^2 - \bar{x}^2} = \sqrt{12.75 - 3.25^2} = 1.479$

- a) 1.643 b) 1.425 **c) 1.479** d) 2.105 e) 1.886

4. S_y (equal to $\sqrt{\frac{n}{n-1}} \hat{\sigma}_y$) is 3.096. What is S_x ? $S_x = \sqrt{\frac{n}{n-1}} \hat{\sigma}_x = \sqrt{\frac{5}{4}} \cdot 1.479 = 1.707$

- a) 1.90 b) 1.65 **c) 1.71** d) 2.43 e) 2.18

5. $S_{2x+4} = S_{2x} = 2S_x$

- a) $2S_x$** b) $2S_x + 4$ c) S_x d) $4S_x$ e) $4S_x + 4$

6. $r[x, y]$ (equal to $\frac{\overline{xy} - \bar{x}\bar{y}}{\hat{\sigma}_x \hat{\sigma}_y}$) = $\frac{27.5 - 3.25 \cdot 7.25}{1.479 \cdot 2.681} = 0.9930 \dots$

- a) 0.84 (b) 0.99 c) 0.80 d) 0.72 e) 0.91

7. $r[2x+4, 9y-8] = r[x, y]$ Since $2(9) > 0$.

- a) $18 r[x, y]$ b) $18 r[x, y] + 12$ c) $r[x, y] + 12$ (d) $r[x, y]$ e) $r[x, y] + 50$

8. b_1 (slope of sample L.S. line) is

- a) S_y/S_x (b) $r[x, y] S_y/S_x$ c) $r[x, y]$ d) $\sqrt{1 - r[x, y]^2} S_y/S_x$

9. Usual estimate of slope β_1 (of population L.S. line) is $b_1 = r \frac{S_y}{S_x} = 1.8$

- (a) 1.800 b) 1.048 c) 0.886 d) 0.773 e) 0.993

10. $SE(b_1) = \sqrt{\frac{1-r^2}{n-2} \frac{b_1}{r}}$

- a) 1.9426 b) 2.131 c) 0.0834 (d) 0.1510 e) 0.0007

11. Applicable df if population is 2D normal (or if, more generally, the normal errors model applies)

- a) 4 (b) 2 c) 3 d) 5 e) 1 $df = n - 2 = 4 - 2 = 2$

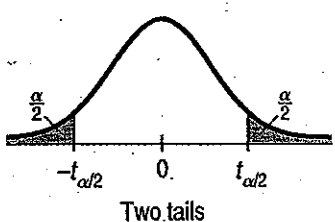
12. Applicable t-score for 95% CI for β_1 $95\% \text{ CONFIDENCE, } df = 2$

- a) 12.706 (b) 4.303 c) 3.182 d) 2.776 e) 2.571

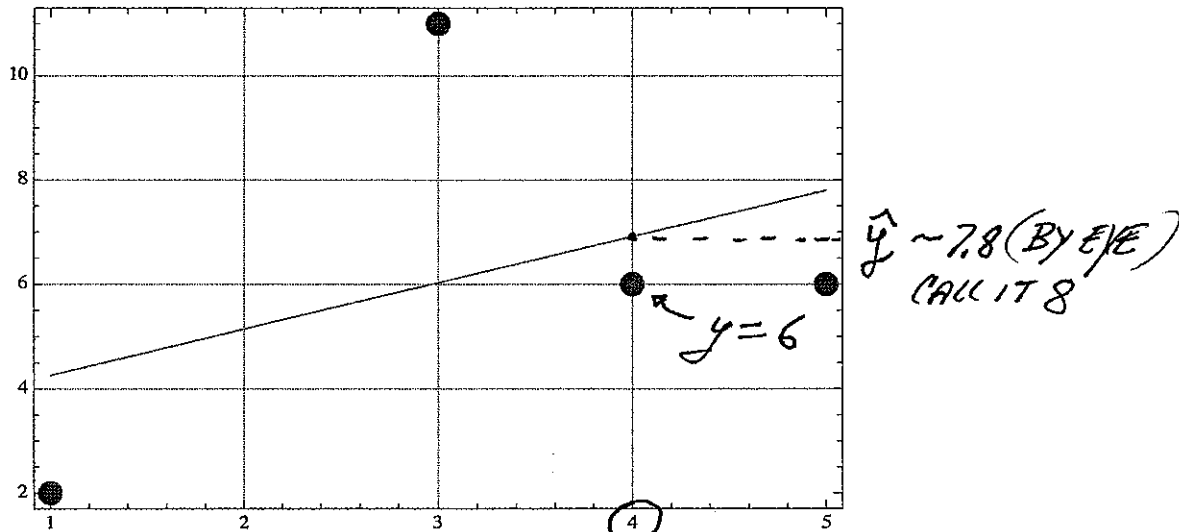
13. 95% CI for β_1 . $b_1 \pm t SE(b_1) = 1.8 \pm 4.303 \cdot 0.1510$

- a) {0.826341, 1.95352} b) {0.182634, 2.20535} c) {0.634182, 2.35205} d) {0.218263, 3.00535} (e) {1.5025, 2.4498}

Two-tail probability	0.20	0.10	0.05	0.02	0.01		
One-tail probability	0.10	0.05	0.025	0.01	0.005		
Table T							
Values of t_α	df					df	
	1	3.078	6.314	12.706	31.821	63.657	1
	2	1.886	2.920	4.303	6.965	9.925	2
	3	1.638	2.353	3.182	4.541	5.841	3
	4	1.533	2.132	2.776	3.747	4.604	4
	5	1.476	2.015	2.571	3.365	4.032	5
	6	1.440	1.943	2.447	3.143	3.707	6
	7	1.415	1.895	2.365	2.998	3.499	7
	8	1.397	1.860	2.306	2.896	3.355	8
	9	1.383	1.833	2.262	2.821	3.250	9
	∞	1.282	1.645	1.960	2.326	2.576	∞
Confidence levels		80%	90%	95%	98%	99%	



14-16. Answer questions about the data with its L.S. fit.



14. Residual $y - \hat{y}$ for the point with $x = 4$.

- a) -1 b) 2 c) 3 **d) -2** e) 1

15. b_1 (closest value, by eye)

- a) 1.7 b) 2.6 **c) 1.0** d) 0.5 e) 1.8

$$\frac{\text{RISE}}{\text{RUN}} = \frac{\text{RISE} \sim 4 \text{ TO } 8}{\text{RUN} = 1 \text{ TO } 5} \quad \text{ie } \frac{8-4}{5-1} \sim 1$$

16. Contribution of the point (4, 6) to the sum of squares of residuals.

- a) 1 **b) 4** c) 9 d) -1 e) -3

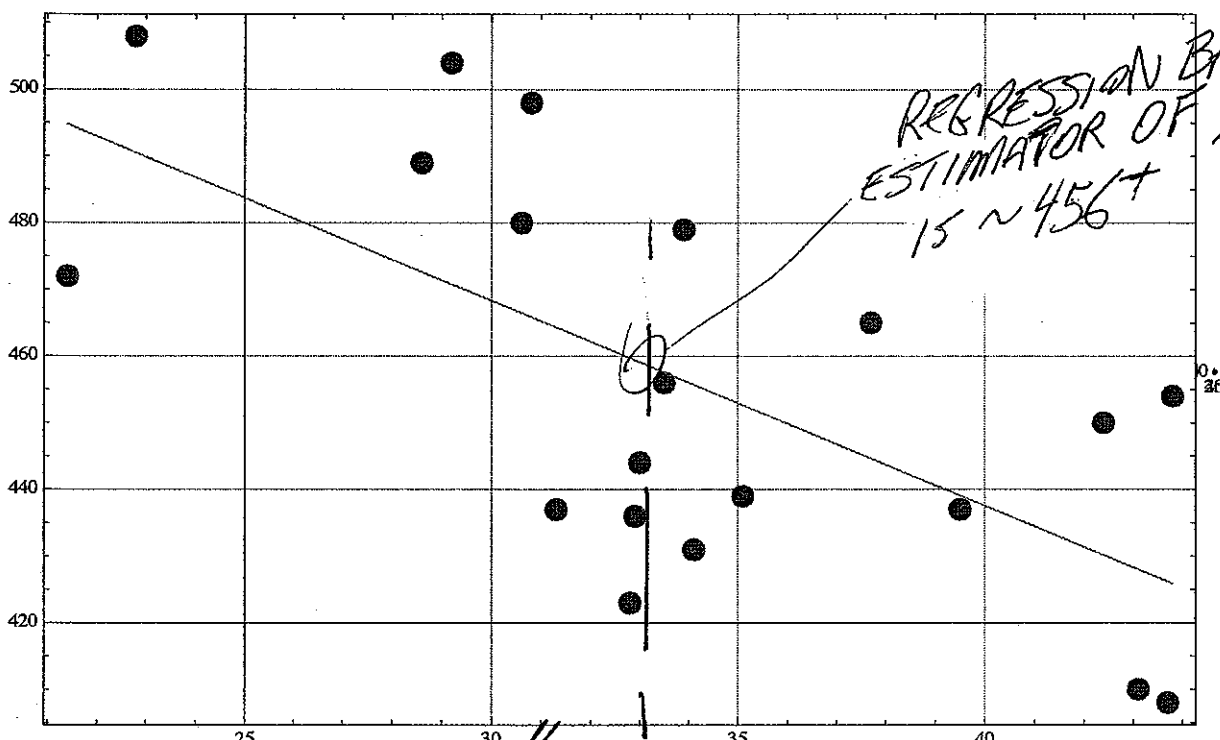
$$(y - \hat{y})^2 \sim 4$$

17-20. Here is a data plot

x = time at table

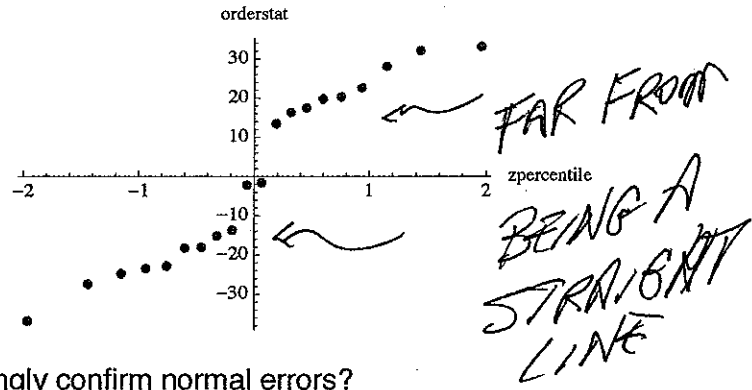
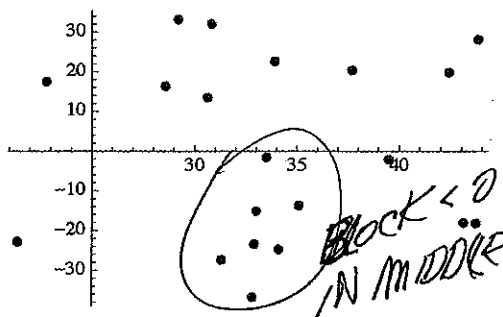
y = calories consumed

together with regression statistics. Also shown are a plot of the residuals versus x (left plot) and a normal probability plot of the residuals (right plot).



$IF \mu_x = 33$

```
regrstats[x_, y_] := {mean[x], mean[y], s[x], s[y], r[x, y], b1}
                    34.01      456      6.31647 29.9403 -0.649167 -3.07707
```



17. Would you agree that the plots strongly confirm normal errors?

- a) only left does b) both do c) only right does d) neither

FRACTION

18. What ~~percentage~~ of the sample variance of y is explained by L.S. fit of y on x ?

- a) $1 - (-0.65)$ b) $(-0.65)^2$ c) $\sqrt{1 - (-0.65)^2}$
 d) $\sqrt{1 - (-3.08)^2}$ e) 0.65

$$r = -0.649 \sim -0.65$$

$$\text{ANS. } r^2 (\times 100\%)$$

19. If the population mean is **known** to be $\mu_x = 33$ then the regression-based estimate of μ_x is (from the least squares plot) around ~ 456 SEE PLOT ABOVE.

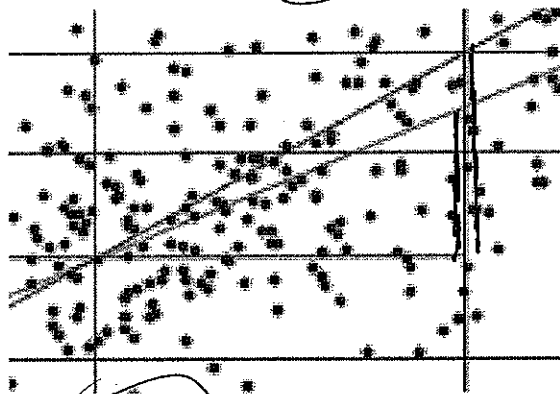
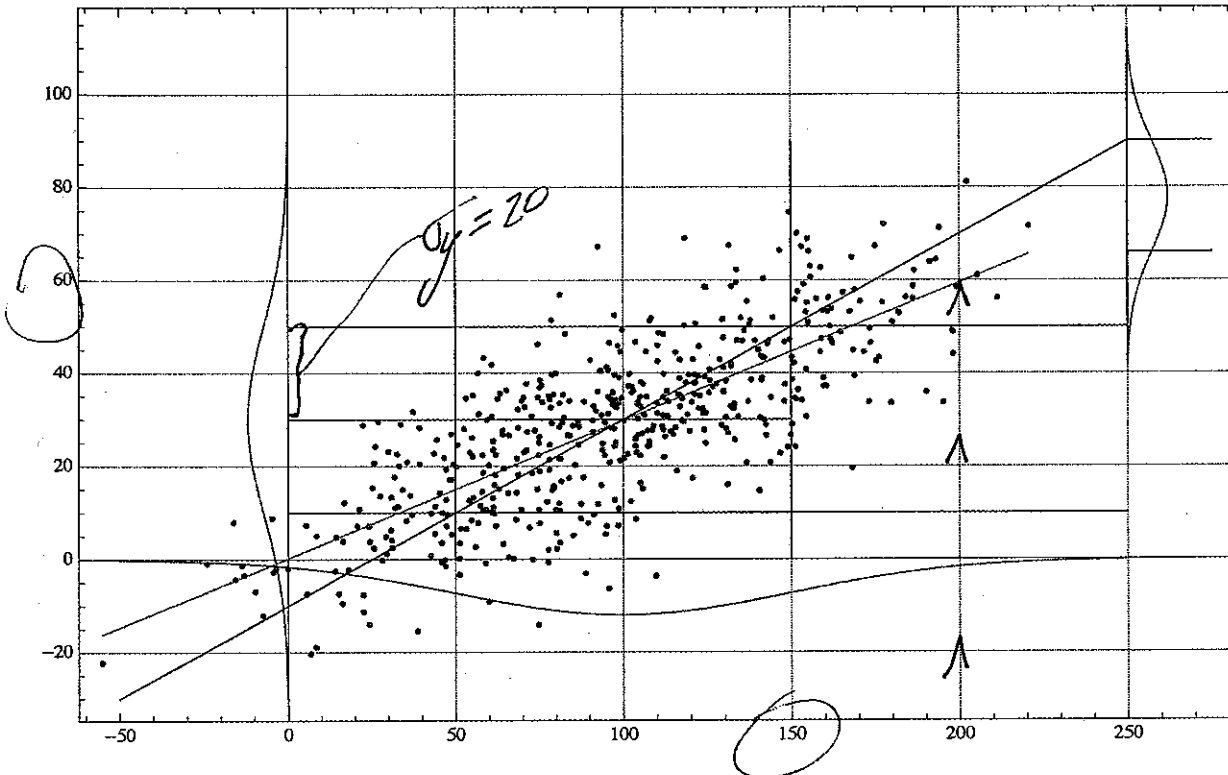
- a) 456 b) 430 c) 440 d) 468 e) 424

20. If the population mean is **known** to be $\mu_x = 33$ then the SE of the regression-based estimate of μ_x is s_y/\sqrt{n} multiplied by

- a) $\sqrt{1 - (-3.08)^2}$ b) 0.65 c) $1 - (-0.65)$
 d) $(-0.65)^2$ e) $\sqrt{1 - (-0.65)^2}$

$$\sqrt{1 - r^2}$$

21-23. Read off the requested population quantities from the population fit show below.



$r = \frac{\text{RISE OF L.S.}}{\text{RISE OF NAIVE}}$
 ~ 0.75
 BY EYE

21. ρ (CLOSEST TO)

- a) 0.5 b) 0.9 c) 0.2 d) 0.4 e) 0.75

22. $\mu_x + \sigma_x$

- a) 130 b) 180 c) 150 d) 100 e) 200.

SEE PLOT ABOVE

23. L.S. prediction of y for $x = 200$.

- a) 70 b) 40 c) 30 d) 60 e) 50

SEE PLOT ABOVE

24. Mean of all population y with $x = 200$.

- a) 60 b) 50 c) 70 d) 40 e) 30

SAME AS # 23 FOR NORMAL

25. SD of all y with $x = 200$.

- a) $20\sqrt{1-\rho}$ b) 20 c) $\sqrt{1-\rho}$ d) $\sqrt{1-\rho^2}$ e) $20\sqrt{1-\rho^2}$

$\sigma_y = 20$ (SEE PLOT)

26-32. (a) True or (b) False?

26. For a sample of many pairs (x, y) from a 2D normal distribution the plot of vertical strip averages of y for each value x is roughly a straight line. TRUE (a). GALTON'S DISCOVERY - (NTS).

27. For a sample of $n = 2$ pairs (x, y) from a 2D normal population a t-based CI for the population slope β_1 applies with $df = 1$. FALSE (b).

28. Galton's plot of pairs $x =$ parental sweet pea size, $y =$ filial sweet pea size for parent seeds selected at $x = 0, \pm 1, \pm 2, \pm 3$ units of s_x from \bar{x} , the plot appeared elliptical. FALSE (b).
 EQUAL #S OF

29. The Least Squares line is always the same as the regression line. FALSE (b).

30. For a large enough sample size n from any given population of (x, y) , the sample least squares line will most probably fall very close to the population least squares line. FALSE (b)

31. For a large enough sample size n , the joint distribution of (\bar{x}, \bar{y}) will be approximately 2D normal even though the population may not be 2D normal. Moreover, the least squares line for that 2D normal will be the same as the population least squares line. TRUE (a).

32. Galton's regression effect implies that, owing to the 2D normality of the plot, sons of fathers scoring 2 standard deviations above average height for fathers will on average be only (2 r) standard deviations above average height for sons. TRUE (a).